

Combined Graduate Level Examination-2019 (Tier-I)

Section : General Intelligence and Reasoning

Q.1 Read the given statements and conclusions carefully. Assuming that the information given in the statements is true, even if it appears to be at variance with commonly known facts, decide which of the given conclusions logically follow(s) from the statements.

Statements:

1. Some animals are elephants.
2. Some elephants are tigers.

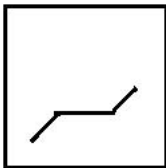
Conclusions:

- I. Some animals are tigers.
- II. No tiger is an animal.

Only conclusion II follows.


2. Either conclusion I or II follows.
3. Neither conclusion I nor II follows.
4. Only conclusion I follows.

Q.2 Select the option figure in which the given figure is embedded (rotation is NOT allowed).

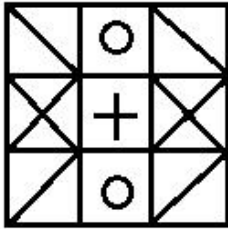


Ans

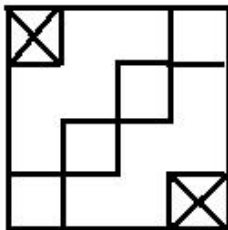
1.




2.



3.



4.




Q.3 Which of the option figures is the exact mirror image of the given figure when the mirror is held at the right side?

RST2PK9LOX

Ans

 1. XOLAKPZTЯ

 2. XOLKPKTЯ


 3. XOLKPKTЯ


 4. XOLKPKTЯ


Q.4 Arrange the following words in the order in which they appear in an English dictionary.


1. Rightly
2. Rigidly
3. Righteous
4. Rigour
5. Rights

Ans

 1. 3, 1, 5, 4, 2


 2. 1, 3, 5, 2, 4

 3. 3, 1, 5, 2, 4


 4. 3, 5, 1, 4, 2

Q.5 In the following equations, if '+' is interchanged with '-' and '6' is interchanged with '7', then which equation would be correct?

Ans

 1. $67 - 76 + 43 = 100$

 2. $78 - 68 + 66 = 59$

 3. $76 - 75 + 77 = 56$

 4. $62 - 67 + 76 = 83$

Q.6 Select the option in which the words share the same relationship as that shared by the given pair of words.

Clock : Time

- Ans**
- 1. Balance : Scale
 - 2. Taseometer : Wind
 - 3. Anemometer : Strains
 - 4. Ammeter : Current

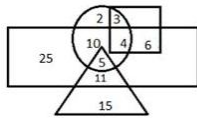
Q.7 Study the given pattern carefully and select the number that can replace the question mark (?) in it.

6	21	14
40	500	?
8	25	7

- Ans**
- 1. 84
 - 2. 78
 - 3. 91
 - 4. 98

Q.8 The given Venn diagram represents employees in an organisation:

The triangle represents executives, the circle represents females, the rectangle represents MBAs and the square represents technical staff. The numbers given in the diagram represent the number of persons in that particular category.



How many female executives are there in the organisation?

- Ans**
- 1. 15
 - 2. 5
 - 3. 10
 - 4. 11

SSC CGL Tier-1 Printed Study Kit



- 100% Syllabus Covered
- 12 Books , 1300+ Pages
- 5600+ MCQs
- 08 Year Solved Papers & Mock Tests (PDF Copy)
- 1 year Current Affairs (PDF Copy)

50% OFF

~~₹ 6,000/-~~
₹ 2,999/-

FREE SHIPPING 

for Exam Help Call Us at: +91 8800734161

 **SSCPortal.in**

What you will get:

- 100% Syllabus Covered
- 12 Books
- 1300+ Pages
- 5600+ MCQs
- 8 Year Solved Papers (PDF Copy)
- Five Practice Papers (PDF Copy)
- One Year Current Affairs (PDF Copy)
- Guidance & Support from Our Experts

Price of the Kit:

~~Rs. 6,000~~

Rs. 2,999/-

(Limited time Offer)



Buy Online



Net Banking

Order Online (100% Safe)

[Click here for Other Payment Options \(Cash/NEFT/etc\)](#)

FOR MORE DETAILS CLICK HERE

50% OFF

Q.9 Four words have been given, out of which three are alike in some manner, while one is different. Select the odd word.

- Ans**
- 1. Ferry
 - 2. Yacht
 - 3. Ship
 - 4. Submarine

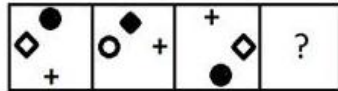
Q.10 The ratio of the present ages of Asha and Lata is 5 : 6. If the difference between their ages is 6 years, then what will be Lata's age will be after 5 years?

- Ans**
- 1. 40
 - 2. 45
 - 3. 41
 - 4. 35

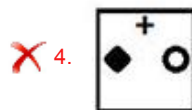
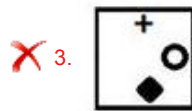
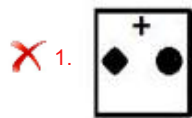
Q.11 Select the option in which the numbers are related in the same way as are the numbers in the given set.
(269, 278, 296)

- Ans**
- 1. (109, 118, 128)
 - 2. (577, 586, 598)
 - 3. (419, 430, 448)
 - 4. (313, 322, 340)

Q.12 Select the figure that can replace the question mark (?) in the following series.



Ans



Q.13 Select the option that is related to the third number in the same way as the second number is related to the first number and the sixth number is related to the fifth number.

12 : 72 :: 18 : ? :: 22 : 242

- Ans 1. 140
 2. 162
 3. 160
 4. 164

Q.14 Select the set of letters that when sequentially placed in the blanks of the given letter series will complete the series.

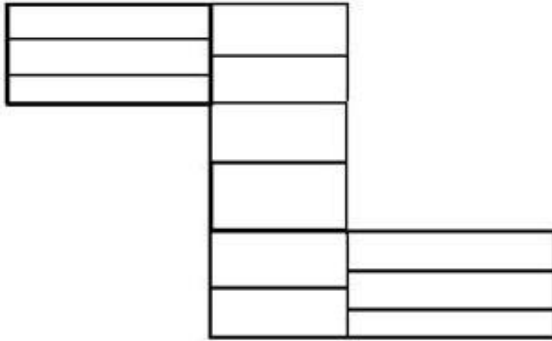
k _lmm_l_mk_mmk_lkkl_m

- Ans 1. k, l, k, l, m
 2. k, l, m, k, k
 3. k, m, m, k, l
 4. l, k, m, k, k

Q.15 In a certain code language, 'HARVEST' is coded as '22-21-7-24-20-3-10'. How will 'FARMER' be coded as in that language?

- Ans
- 1. 19-7-15-19-3-8
 - 2. 20-7-15-20-3-8
 - 3. 20-7-14-21-3-8
 - 4. 19-7-15-20-3-7

Q.16 How many rectangles are there in the given figure?



- Ans
- 1. 34
 - 2. 33
 - 3. 32
 - 4. 30

कर्मचारी चयन आयोग (CGL) परीक्षा अध्ययन सामग्री



- 100% Syllabus Covered
- 4 Books, 900+ Pages
- 2500+ MCQs
- 08 Year Solved Papers & Mock Tests (PDF Copy)
- 1 year Current Affairs (PDF Copy)

50% OFF

~~₹ 4,200/-~~
₹ 2,100/-

FREE SHIPPING 

for Exam Help Call Us at: +91 8800734161

SSCPortal.in

आप क्या प्राप्त करेंगे?

- माध्यम: हिन्दी
- 100% पाठ्यक्रम
- कुल 4 पुस्तिकायें, 900 से अधिक पृष्ठ
- 2,500 से अधिक वस्तुनिष्ठ प्रश्न (MCQ)
- 8 Year Solved Papers (PDF Copy)
- Five Practice Papers (PDF Copy)
- हमारे विशेषज्ञों द्वारा मार्गदर्शन और सहायता

Price of the Kit:

Rs. 4,200

Rs. 2,100/-

(Limited time Offer)

 Buy Online

Net Banking

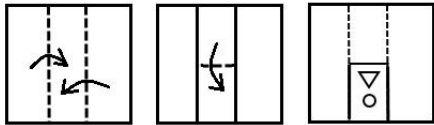
Order Online (100% Safe)

[Click here for Other Payment Options \(Cash/NEFT/etc\)](#)

[FOR MORE DETAILS CLICK HERE](#)


50% OFF

Q.17 The sequence of folding a piece of paper and the manner in which the folded paper has been cut is shown in the following figures. How would this paper look when unfolded?

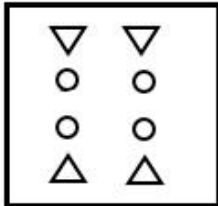


Ans

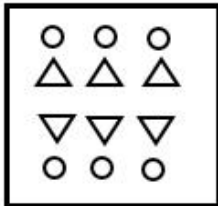
1.



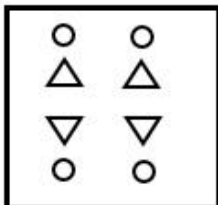
2.



3.



4.



Q.18 Which two numbers should be interchanged to make the given equation correct?

$$9 + 7 \times 5 - 18 \div 2 = 3 \times 4 - 10 + 45 \div 5$$

Ans

1. 7 and 4

2. 18 and 45

3. 2 and 5

4. 9 and 3

Q.19 Amit is the brother of Sonia. Jyoti is the sister of Nikita. Sonia is the daughter of Satish's father. Nikita is the daughter of Kavinder. Jyoti is the mother of Amit. Mukesh is Nikita's only sister's husband. How is Satish related to Kavinder?

- Ans**
- 1. Grandson
 - 2. Son-in-law
 - 3. Son
 - 4. Brother

Q.20 Select the option that is related to the third word in the same way as the second word is related to the first word.
Medicine : Disease :: Food : ?

- Ans**
- 1. Hunger
 - 2. Nutrition
 - 3. Energy
 - 4. Thirst

Q.21 In a certain code language, WARDROBE is written as YXVYXHJV. How will ACCURATE be written as in that language?

- Ans**
- 1. CZHPYTBV
 - 2. BZHPXTBV
 - 3. DZGPXTBV
 - 4. CZGPXTBV

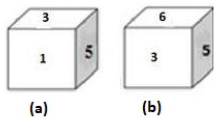
Q.22 Select the letter-cluster that can replace the question mark (?) in the following series.
CXB, HUI, MRP, ROW, ?

- Ans**
- 1. VKD
 - 2. WLD
 - 3. WLZ
 - 4. VKC

Q.23 Four letter-clusters have been given, out of which three are alike in some manner, while one is different. Select the odd letter-cluster.

- Ans
- ✓ 1. FVKO
 - ✗ 2. NMSH
 - ✗ 3. BYGT
 - ✗ 4. DWIR

Q.24 Two positions of the same dice are shown. Select the number that will be on the face opposite to the one showing 6.



- Ans
- ✗ 1. 5
 - ✓ 2. 1
 - ✗ 3. 3
 - ✗ 4. 4

Q.25 Select the number that can replace the question mark (?) in the following series.

17, 21, 30, 46, 71, ?

- Ans
- ✗ 1. 101
 - ✗ 2. 96
 - ✓ 3. 107
 - ✗ 4. 105



SSC EXAMS PRINTED STUDY NOTES

Study Material for SSC CGL (Tier-1) Examination	English	CLICK HERE
Study Kit for SSC CGL (Tier-2) Exam	English	CLICK HERE
Study Kit for SSC CHSL (10+2) Examination	English	CLICK HERE
Study Kit for SSC Stenographers (Grade 'C' & 'D')	English	CLICK HERE
Study Kit for Multitasking (Non-Technical) - MTS	English	CLICK HERE
Study Kit for SSC Constables (GD) Exam	English	CLICK HERE
Study Kit For SSC Sub-Inspectors in Delhi Police, CAPFs, CISF	English	CLICK HERE
Study Kit for SSC Junior Engineer Exam (Paper-1)	English	CLICK HERE
IAS EXAMS STUDY MATERIALS		
Study Kit for IAS (Pre) GENERAL STUDIES Paper-1 (GS)	English	CLICK HERE
Study Kit for IAS (Pre) CSAT Paper-2(Aptitude)	English	CLICK HERE
सामान्य अध्ययन (GS) प्रारंभिक परीक्षा (Pre) पेपर-1	हिन्दी	CLICK HERE
आई. ए. एस. (सी-सैट) प्रारंभिक परीक्षा पेपर -2	हिन्दी	CLICK HERE
Gist of NCERT Study Kit For UPSC Exams	English	CLICK HERE
यूपीएससी परीक्षा के लिए एनसीईआरटी अध्ययन सामग्री	हिन्दी	CLICK HERE