

Q.4 The statements below are followed by two conclusions labeled I and II. Assuming that the information in the statements is true, even if it appears at variance with generally established facts, decide which conclusion(s) logically and definitely follow(s) from the information given in the statements.

Statements:

- 1.) All pens are frogs.
- 2.) Some crows are frogs.

Conclusions

- I. No pen is a crow.
- II. Some pens are crows.

- Ans 1. Either conclusion I or conclusion II follows.
 2. Only conclusion II follows.
 3. Both conclusions follow.
 4. Only conclusion I follows.

Question ID : 9895803709
Chosen Option : 2

Q.5 Select the option that will correctly replace the question mark (?) in the series.

112, 108, 92, 56, ?

- Ans 1. -8
 2. -7
 3. -6
 4. 7

Question ID : 9895803711
Chosen Option : 1

Q.6 Choose the option in which the figure marked 'X' is embedded. (Rotation is not allowed)



- Ans 1.
 2.
 3.
 4.

Question ID : 9895803719
Chosen Option : 3

Q.7 Choose the odd one out of the given options.

- Ans 1. CEK
 2. AHI
 3. DFH
 4. CFI

Question ID : 9895803699
 Chosen Option : 3

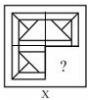
Q.8 Select the option that will correctly replace the question mark (?) in the series.

SHO, QJN, OLM, ?

- Ans 1. LWV
 2. LWL
 3. MNL
 4. MML

Question ID : 9895803698
 Chosen Option : 3

Q.9 Select a figure from amongst the four alternatives that when placed in the blank space (?) of figure X will complete the pattern. (Rotation is not allowed).



- Ans 1.
 2.
 3.
 4.

Question ID : 9895803718
 Chosen Option : 4

Q.1 Select the option that is related to the third number in the same way as the second number is related to the first number.
 0

22 : 88 :: 37 : ?

- Ans 1. 221
 2. 144
 3. 169
 4. 370

Question ID : 9895803713
 Chosen Option : 2

Q.1 Eight friends A, B, C, D, E, F, G and H are sitting around a circular table facing each other for a lunch. A is opposite D and third to the right of B. G is between A and F. H is to the right of A. E is between C and D. Who is sitting between B and E?

Ans

- 1. D
- 2. E
- 3. F
- 4. C

Question ID : 9895803707
Chosen Option : 2

Q.1 Seven friends O, P, Q, R, S, T and U are watching a movie sitting in a row. P is sitting at one extreme end. Q is sitting to the immediate left of S. P is sitting second to the right of T. U is not sitting at any extreme end. O is sitting between R and T. Who is sitting between Q and R?

- Ans
- 1. Q
 - 2. T
 - 3. R
 - 4. S

Question ID : 9895803706
Chosen Option : 4

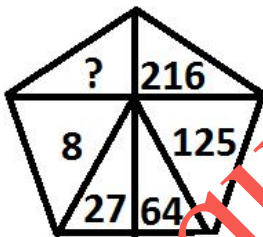
Q.1 Select the option that is related to the third term in the same way as the second term is related to the first term.

3 Ichthyology: Fishes :: Pedology : ?

- Ans
- 1. Shells
 - 2. Names
 - 3. Soil
 - 4. Moon

Question ID : 9895803701
Chosen Option : 3

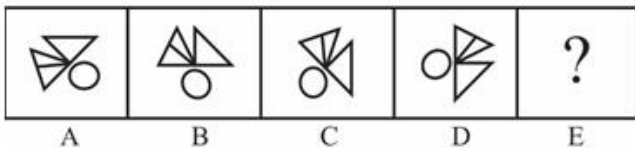
Q.1 Select the option that will correctly replace the question mark (?) in the given pattern.



- Ans
- 1. 343
 - 2. 7
 - 3. 37
 - 4. 49





Question ID : 9895803715
Chosen Option : 2

Q.1 Choose the option that would follow next in the given figure series.



A B C D E

Ans

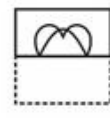
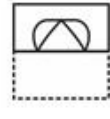
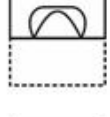

- 1. 
- 2. 
- 3. 
- 4. 

Question ID : 989503717
Chosen Option : 3

Q.1 A square transparent sheet with a pattern is given. How will the pattern appear when the transparent sheet is folded along the dotted line?



Ans

- 1. 
- 2. 
- 3. 
- 4. 

Question ID : 9895803721
Chosen Option : 4

Q.1 J, K, L, M, N and O are six teachers. Each one teaches a different subject out of Hindi, English, Math, Science, Social Science and Arts, not necessarily in the same order. Each of them teaches on only one day, from Monday to Saturday, not necessarily in the same order.

J teaches Science on Wednesday. O teaches Math second after J. K teaches on the first day of the week, but teaches neither Hindi nor English. M teaches English before N and L teaches Arts before J. Who teaches on Tuesday?

- 1. M
- 2. K
- 3. L
- 4. N

Question ID : 9895803708
Chosen Option : 3

8 Choose the option that most closely resembles the mirror image of the given figure when mirror is placed at the right side.



Ans



Question ID : 9895803720
Chosen Option : 1

Q.1 In a certain code, POTATO is written as AOOPTT. How will BARBER be written in that code?
9

- Ans
- ✓ 1. ABBERR
 - ✗ 2. ABBRER
 - ✗ 3. ARBERB
 - ✗ 4. ABRBER

Question ID : 9895803704
Chosen Option : 1

Q.2 Choose the odd number out of the given options.
0

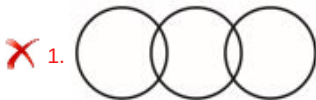
- Ans
- ✗ 1. 97
 - ✗ 2. 89
 - ✗ 3. 83
 - ✓ 4. 63

Question ID : 9895803714
Chosen Option : 4

Q.2 Select the Venn diagram that best represents the given set of classes.
1

Wheat, Crops, Farmers

Ans



✓ 3. 88

✗ 4. 30

Question ID : 9895803705
Chosen Option : 1

Q.2
6 Which articles of the Indian Constitution cover the fundamental right against exploitation?

Ans ✗ 1. Articles 29-30

✗ 2. Articles 19-22

✗ 3. Articles 14-18

✓ 4. Articles 23-24

Question ID : 9895805348
Chosen Option : 3

Q.2
7 Where and against which country did Sachin Tendulkar score his 100th century?

Ans ✗ 1. Perth stadium, against West Indies

✓ 2. Shere Bangla stadium, against Bangladesh

✗ 3. Eden park, against New Zealand

✗ 4. Sydney cricket ground, against Australia

Question ID : 9895805355
Chosen Option : 2

Q.2
8 In which state is Kaziranga National Park situated?

Ans ✓ 1. Assam

✗ 2. Madhya Pradesh

✗ 3. Rajasthan

✗ 4. Bihar

Question ID : 9895805339
Chosen Option : 1

Q.2
9 Which of these languages is declared 'classical' by the Government of India?

Ans ✗ 1. Marathi

✗ 2. Hindi

✓ 3. Odia

✗ 4. Pali

Question ID : 9895805335
Chosen Option : 2

Q.3
0 Arrange the following events in correct chronology:

- 1) Champaran Satyagraha against indigo plantation
- 2) Starting of non-cooperation Khilafat movement
- 3) Rowlatt Satyagraha
- 4) Arrival of Simon commission in India

- Ans 1. 1-3-2-4
 2. 3-4-2-1
 3. 4-2-1-3
 4. 1-2-3-4

Question ID : 9895805342
Chosen Option : 2

Q.3
1 What was the amendment done to the Indian Constitution by 52nd amendment done in 1985?

Ans 1. Anti-defection law was included

2.

Amendment to the Union and State lists with respect to raising of taxes

3. The words 'socialist secular' added to the preamble

4. Formation of Sikkim as a state within the Indian Union

Question ID : 9895805341
Chosen Option : 4

Q.3
2 The Mettur dam is built on which river and is in which state?

Ans 1. Tungabhadra river, Karnataka

2. Kali river, Karnataka

3. Kaveri river, Tamilnadu

4. Narmada river, Madhya Pradesh

Question ID : 9895805344
Chosen Option : 4

Q.3
3 Which of these personalities is popularly known as the 'father of the Indian film industry'?

Ans 1. Amitabh Bachchan

2. Dadasaheb Phalke

3. Dev Anand

4. Rajesh Khanna

Question ID : 9895805338
Chosen Option : 2

Q.3
4 The silver coin introduced by Sher Shah Suri was called:

Ans 1. Tankah

2. Rupiya

3. Mohar

4. Dinar

Question ID : 9895805345
Chosen Option : 3

Q.3
5 The Kani Shawl handicraft variety belongs to which of the following states of India?

Ans 1. Jammu & Kashmir

- 2. Arunachal Pradesh
- 3. Himachal Pradesh
- 4. Uttar Pradesh

Question ID : 9895805358
Chosen Option : 3

Q.3
6 Which of the following is not a term associated with credit?

- Ans
- 1. Necessary documents
 - 2. Collateral
 - 3. Interest rate
 - 4. Stamp by finance minister

Question ID : 9895805354
Chosen Option : 3

Q.3
7 Which of the following competitions is not associated with Indian football?

- Ans
- 1. Ranji Trophy
 - 2. Federation Cup
 - 3. Santosh Trophy
 - 4. Durand Cup

Question ID : 9895805357
Chosen Option : 3

Q.3
8 Scurvy is caused by the deficiency of which vitamin?

- Ans
- 1. Vitamin C
 - 2. Vitamin A
 - 3. Vitamin D
 - 4. Vitamin K

Question ID : 9895805351
Chosen Option : 1

Q.3
9 In which Indian state is bamboo drip irrigation system a very old practice?

- Ans
- 1. Chattisgarh
 - 2. Meghalaya
 - 3. Telangana
 - 4. Maharashtra

Question ID : 9895805350
Chosen Option : 2

Q.4
0 Which is the highest quality hard coal of the below?

- Ans
- 1. Peat
 - 2. Lignite

3. Bituminous

4. Anthracite

Question ID : 9895805343

Chosen Option : 3

Q.4
1 The Treaty of Purandar was signed between:

Ans 1. Afghans and Portuguese

2. Nawab of Bengal and Rajputs

3. Eastern Gangas and Cholas

4. Mughals and Marathas

Question ID : 9895805337

Chosen Option : 3

Q.4
2 Which of the motions is passed in the parliament to remove the President of India?

Ans 1. Impeachment Motion

2. Censure Motion

3. Cut Motion

4. No Confidence Motion

Question ID : 9895805347

Chosen Option : 1

Q.4
3 Which of these is an organisation that promotes sustainable management and conservation of tropical forests?

Ans 1. United Nations Forum on Forests

2. Greenpeace

3. World Wide Fund for Nature

4. International Tropical Timber Organization

Question ID : 9895805340

Chosen Option : 3

Q.4
4 Which of the following issues currency notes in India?

Ans 1. PNB

2. RBI

3. SBI

4. ICICI

Question ID : 9895805353

Chosen Option : 2

Q.4
5 What is the neutral value of the pH scale?

Ans 1. Equal to 14

2. Less than 7

3. Equal to 7

4. Above 7

Question ID : 9895805349
Chosen Option : 4

Q.4
6 Bananas turn brown in colour because:

- Ans
- 1. an enzyme converts starch into sugar
 - 2. the air reacts with the enzymes in the banana
 - 3. Bisphosphonates reacts with the enzymes in the banana
 - 4. an enzyme converts sugar into starch

Question ID : 9895805356
Chosen Option : 1

Q.4
7 On which of the below can an excise duty charged?

- Ans
- 1. A company's revenue
 - 2. Export of goods and services
 - 3. Import of goods and services
 - 4. Goods manufactured

Question ID : 9895805352
Chosen Option : 2

Q.4
8 Who is the author of the book 'India's Export Trends and Prospects for Self-Sustained Growth'?

- Ans
- 1. Shashi Tharoor
 - 2. Manmohan Singh
 - 3. Atal Bihari Vajpayee
 - 4. Narendra Modi

Question ID : 9895805336
Chosen Option : 2

Q.4
9 In which Indian state is the Hornbill festival celebrated?

- Ans
- 1. Nagaland
 - 2. Manipur
 - 3. Sikkim
 - 4. Tripura

Question ID : 9895805346
Chosen Option : 2

Q.5
0 What is the name of Malala Yousafzai's biopic?

- Ans
- 1. The Aviator
 - 2. Frida
 - 3. The social network
 - 4. Gul Makai

Question ID : 9895805334

Q.5
1 What is the median of the given data?

2, 3, 2, 3, 6, 5, 4, 7

- Ans
- 1. 4
 - 2. 4.5
 - 3. 3.5
 - 4. 3

Question ID : 9895805646
Chosen Option : 1

Q.5
2 A sum becomes five times of itself in 8 years at simple interest. What is the rate of interest per annum?

- Ans
- 1. 37.5%
 - 2. 25%
 - 3. 62.5%
 - 4. 50%

Question ID : 9895805653
Chosen Option : 2

Q.5
3 The table given below shows the marks obtained by 4 students in 5 subjects. The maximum marks of each subject is 100.

Subjects	Students			
	P1	P2	P3	P4
S1	89	100	92	91
S2	62	52	72	37
S3	57	55	70	65
S4	76	85	76	58
S5	85	70	66	62

What is the difference in the average marks per student for subjects S5 and S2?

- Ans
- 1. 12
 - 2. 15
 - 3. 17.5
 - 4. 19.5

Question ID : 9895805663
Chosen Option : 3

Q.5
4 The length breadth and height of a cuboid are in the ratio 4 : 3 : 2. If the volume of cuboid is 1536 cm^3 , then what will be the total surface area of the cuboid?

- Ans
- 1. 868 cm^2
 - 2. 416 cm^2
 - 3. 624 cm^2
 - 4. 832 cm^2

Question ID : 9895805661
Chosen Option : 3

Q.5
5 The length, breadth and height of a solid cuboid is 20 cm, 16 cm and 12 cm respectively. If cuboid is melted to form identical cubes of side 4 cm, then what will be the number of identical cubes?

- Ans
- 1. 56
 - 2. 72
 - 3. 90

✓ 4. 60

Question ID : 9895805660
Chosen Option : 1

Q.5 A bike covers a certain distance at a speed of 56 km/hr in 16 hours. How much time it will take to cover the same distance at the speed of 64 km/hr?

- Ans
- ✓ 1. 14 hr
 - ✗ 2. 18 hr
 - ✗ 3. 16 hr
 - ✗ 4. 12 hr

Question ID : 9895805658
Chosen Option : 4

Q.5 What is the value of $(3 \times 1500 \div 40 + 5 \div \frac{2}{7} \text{ of } 70)$?

- Ans
- ✗ 1. $\frac{433}{4}$
 - ✗ 2. $\frac{435}{4}$
 - ✓ 3. $\frac{451}{4}$
 - ✗ 4. $\frac{473}{4}$

Question ID : 9895805641
Chosen Option : 4

Q.5 Curved surface area of a cylinder is 110 cm^2 . If the height of cylinder is 5 cm, then what will be the diameter of its base?

- Ans
- ✗ 1. 14 cm
 - ✓ 2. 7 cm
 - ✗ 3. 3.5 cm
 - ✗ 4. 10.5 cm

Question ID : 9895805659
Chosen Option : 2

Q.5 Mohit and Sumit start a business with investment of ₹ 74000 and ₹ 96000 respectively. If at the end of the year they earn profit in the ratio of 5 : 8, then what will be ratio of the time period for which they invest their money?

- Ans
- ✗ 1. 37 : 32
 - ✗ 2. 13 : 18
 - ✗ 3. 25 : 32
 - ✓ 4. 30 : 37

Question ID : 9895805652
Chosen Option : 4

Q.6 The value of discount of 18% on first article is equal to the value of discount of 13% on second article. What is the ratio of the marked price of two articles?

- Ans
- ✗ 1. 17 : 24
 - ✗ 2. 39 : 50
 - ✓ 3. 13 : 18

✗ 4. 13 : 19

Question ID : 9895805645
Chosen Option : 1

Q.6 What will be the Highest Common Factor of 5, 10 and 20?

1

- Ans
- 1. 5
 - 2. 10
 - 3. 1
 - 4. 15

Question ID : 9895805640
Chosen Option : 1

Q.6 The average weight of 12 boxes is 63 kg. If four boxes having an average weight of 70 kg are removed, then what will be new average weight of the remaining boxes?

2

- Ans
- 1. 60 kg
 - 2. 59 kg
 - 3. 60.5 kg
 - 4. 59.5 kg

Question ID : 9895805643
Chosen Option : 2

Q.6 F alone can complete a work in 24 days and G alone can complete the same work in 32 days. F and G start the work together but G leaves the work 8 days before the completion of work. In how many days the work will be completed?

3

- Ans
- 1. $\frac{130}{5}$ days
 - 2. $\frac{106}{7}$ days
 - 3. $\frac{114}{7}$ days
 - 4. $\frac{120}{7}$ days

Question ID : 9895805655
Chosen Option : 3

Q.6 Working 2 hours in a day, P can complete a work in 10 days and working 5 hours in a day, Q can complete the same work in 6 days. Working 3 hours in a day, in how many days both P and Q together can complete the same work?

4

- Ans
- 1. 3 days
 - 2. 6 days
 - 3. 4 days
 - 4. 5 days

Question ID : 9895805656
Chosen Option : 3

Q.6 Mohit purchases eggs at the rate of ₹ 3 per egg and sells them at the rate of ₹ 5 per egg. On selling 35 eggs, what will be the profit percentage?

5

- Ans
- 1. 33.33%
 - 2. 40%

3. 60%

4. 66.66%

Question ID : 9895805648
Chosen Option : 4

Q.6 A bag has white and yellow balls in the ratio 7 : 11 respectively. If the total number of balls is 108, then how many balls are yellow?
6

Ans 1. 66

2. 44

3. 64

4. 77

Question ID : 9895805650
Chosen Option : 1

Q.6 Varun purchases 75 articles for ₹ 3150 and sells them at a profit equal to the cost price of 15 articles. What will be the selling price of one article?
7

Ans 1. ₹ 42

2. ₹ 51.5

3. ₹ 50.4

4. ₹ 46.5

Question ID : 9895805649
Chosen Option : 1

Q.6 The average age of students is A and the average age of teachers is B . The number of students is 45 times of the number of teachers. What is average age of students and teachers together?
8

Ans 1. $\frac{45A + 8B}{7}$

2. $\frac{45A + B}{46}$

3. $\frac{45A + B}{8}$

4. $\frac{45A + 4B}{23}$

Question ID : 9895805644
Chosen Option : 4

Q.6 The table given below shows the number of students enrolled in different courses of different colleges.
9

Colleges	Courses			
	B1	B2	B3	B4
C1	65	56	65	103
C2	68	58	71	112
C3	72	54	88	125
C4	76	52	75	120
C5	69	60	79	126

What is the difference in the total number of students enrolled in colleges C3 and C4?

Ans 1. 13

2. 11

3. 12

4. 16

Question ID : 9895805664
Chosen Option : 2

Q.7 0 Ram, Sita and Salma invest ₹ 16000, ₹ 22000 and ₹ 18000 respectively to start a business. If the profit at the end of the year is ₹ 26600, then what is share of Ram?

- Ans
- 1. ₹ 10450
 - 2. ₹ 8550
 - 3. ₹ 9650
 - 4. ₹ 7600

Question ID : 9895805651
Chosen Option : 2

Q.7 1 A student got 24% marks in an exam and he failed by 56 marks. If he got 60% marks, then his marks are 70 more than the minimum passing marks. What is the maximum marks for the exam?

- Ans
- 1. 350
 - 2. 260
 - 3. 380
 - 4. 280

Question ID : 9895805647
Chosen Option : 2

Q.7 2 What is the value of $\left[75 \div 25 \text{ of } \left(\frac{4}{3} - \frac{1}{2} + \frac{1}{6}\right)\right]$?

- Ans
- 1. $\frac{5}{6}$
 - 2. 3
 - 3. $\frac{7}{6}$
 - 4. 5

Question ID : 9895805642
Chosen Option : 2

Q.7 3 Raju travels at $\frac{3}{4}$ of his usual speed and reaches his office 24 minutes late than his usual time. If Raju travels at his usual speed, then what will be the time taken by him to reach his office?

- Ans
- 1. 64 minutes
 - 2. 72 minutes
 - 3. 48 minutes
 - 4. 56 minutes

Question ID : 9895805657
Chosen Option : 3

Q.7 4 Compound interest received on a sum in 5th year is ₹ 1200 (interest is compounded annually). If the rate of interest is 22.5% per annum, then what will be the interest in 6th year?

- Ans
- 1. ₹ 1470
 - 2. ₹ 1270
 - 3. ₹ 1200
 - 4. ₹ 270

Question ID : 9895805654
Chosen Option : 4

Q.7 5

The table given below shows the production of rice and the area under rice cultivation of a country for 5 consecutive years Y1, Y2, Y3, Y4 and Y5.

Year	Rice Production (in 1000 kg)	Area Under Rice Cultivation (in 100 square meter)
Y1	520	130
Y2	570	190
Y3	680	150
Y4	720	180
Y5	850	170

What is the yield per square meter for the year Y3?

- Ans
- 1. 37.66 kg
 - 2. 63.33 kg
 - 3. 45.33 kg
 - 4. 52.50 kg

Question ID : 9895805662
Chosen Option : 2

Section : English Language

Q.1 Select the most appropriate word to fill in the blank.

We should always remember not to _____ any problems and issues that may affect our career in any organisation.

- Ans
- 1. affect
 - 2. undertake
 - 3. inflict
 - 4. create

Question ID : 9895805202
Chosen Option : 4

Q.2 Select the most appropriate option to substitute the underlined segment in the given sentence. If there is no need to substitute it, select No Improvement.

After you will return from Bangalore, I will come and meet you.

- Ans
- 1. After you will be returning from
 - 2. No improvement
 - 3. After you returned from
 - 4. After you return from

Question ID : 9895805181
Chosen Option : 3

Q.3 Select the antonym of the given word

AWKWARD

- Ans
- 1. Problematic
 - 2. Convenient
 - 3. Difficult
 - 4. Matchless

Question ID : 9895805195
Chosen Option : 1

Comprehension:

In the following passage some words have been deleted. Fill in the blanks with the help of the alternatives given.

Seafood exports from India (1) _____ yet to gather momentum as (2) _____ prices, adverse weather conditions and (3) _____ continue to affect stocking of shrimps, which account for about three-fourths of the (4) _____ from export of marine products. This apart, seafood exporters are facing (5) _____ from the Seafood Import Monitoring Programme (SIMP) being implemented by the US and it is one of the largest buyers of Indian shrimps.

SubQuestion No : 4

Q.4 Select the most appropriate option that will fill in the blank number 1.

- Ans
- 1. be
 - 2. has
 - 3. are
 - 4. was

Question ID : 9895805187
Chosen Option : 2

Comprehension:

In the following passage some words have been deleted. Fill in the blanks with the help of the alternatives given.

Seafood exports from India (1) _____ yet to gather momentum as (2) _____ prices, adverse weather conditions and (3) _____ continue to affect stocking of shrimps, which account for about three-fourths of the (4) _____ from export of marine products. This apart, seafood exporters are facing (5) _____ from the Seafood Import Monitoring Programme (SIMP) being implemented by the US and it is one of the largest buyers of Indian shrimps.

SubQuestion No : 5

Q.5 Select the most appropriate option that will fill in the blank number 2.

- Ans
- 1. low
 - 2. little
 - 3. small
 - 4. high

Question ID : 9895805188
Chosen Option : 4

Comprehension:

In the following passage some words have been deleted. Fill in the blanks with the help of the alternatives given.

Seafood exports from India (1) _____ yet to gather momentum as (2) _____ prices, adverse weather conditions and (3) _____ continue to affect stocking of shrimps, which account for about three-fourths of the (4) _____ from export of marine products. This apart, seafood exporters are facing (5) _____ from the Seafood Import Monitoring Programme (SIMP) being implemented by the US and it is one of the largest buyers of Indian shrimps.

SubQuestion No : 6

Q.6 Select the most appropriate option that will fill in the blank number 3.

- Ans
- 1. diseases
 - 2. viruses
 - 3. bugs
 - 4. maladies

Question ID : 9895805189
Chosen Option : 1

Comprehension:

In the following passage some words have been deleted. Fill in the blanks with the help of the alternatives given.

Seafood exports from India (1) _____ yet to gather momentum as (2) _____ prices, adverse weather conditions and (3) _____ continue to affect stocking of shrimps, which account for about three-fourths of the (4) _____ from export of marine products. This apart, seafood exporters are facing (5) _____ from the Seafood Import Monitoring Programme (SIMP) being implemented by the US and it is one of the largest buyers of Indian shrimps.

SubQuestion No : 7

Q.7 Select the most appropriate option that will fill in the blank number 4.

- Ans
- 1. takings
 - 2. income
 - 3. cash
 - 4. revenue

Question ID : 9895805190
Chosen Option : 4

Comprehension:

In the following passage some words have been deleted. Fill in the blanks with the help of the alternatives given.

Seafood exports from India (1) _____ yet to gather momentum as (2) _____ prices, adverse weather conditions and (3) _____ continue to affect stocking of shrimps, which account for about three-fourths of the (4) _____ from export of marine products. This apart, seafood exporters are facing (5) _____ from the Seafood Import Monitoring Programme (SIMP) being implemented by the US and it is one of the largest buyers of Indian shrimps.

SubQuestion No : 8

Q.8 Select the most appropriate option that will fill in the blank number 5.

- Ans
- 1. rapture
 - 2. pleasure
 - 3. capture
 - 4. pressure

Question ID : 9895805191
Chosen Option : 2

Q.9 From the given options, identify the segment in the sentence which contains the grammatical error.

The government's interim budget from this financial year contained several measures which have the forthcoming elections in mind.

- Ans
- 1. from this financial year
 - 2. Government's interim budget
 - 3. which have the
 - 4. contained several measures

Question ID : 9895805179
Chosen Option : 2

Q.1 Select the most appropriate option to substitute the underlined segment in the given sentence. If there is no need to substitute it, select No Improvement.

While learning to drive, one of the most important things is to know the traffic rules first.

- Ans
- 1. No improvement
 - 2. When learned to drive
 - 3. When learn driving
 - 4. When learn to drive

Question ID : 9895805182
Chosen Option : 4

Q.1 From the given options, identify the segment in the sentence which contains the grammatical error.

Soon after returning to office, the CBI chief transfer five officers.

- Ans
- 1. returning to office,
 - 2. the CBI chief
 - 3. transfer five officers
 - 4. Soon after

Q.1
2 Select the correctly spelt word.

- Ans
- 1. Substitushion
 - 2. Substitution
 - 3. Substituition
 - 4. Sabstitution

Question ID : 9895805200

Chosen Option : 3

Q.1
3 Select the option that means the same as the given idiom.

To cut both ends

- Ans
- 1. To reject all arguments
 - 2. To argue in support of both sides
 - 3. To consider the truth and untruth
 - 4. To argue against both sides of an issue

Question ID : 9895805196

Chosen Option : 1

Q.1
4 Select the antonym of the given word.

EUPHORIA

- Ans
- 1. Folklore
 - 2. Lethargy
 - 3. Song
 - 4. Music

Question ID : 9895805194

Chosen Option : 4

Q.1
5 Select the correctly spelt word.

- Ans
- 1. Magnanemous
 - 2. Magnanomous
 - 3. Magnanimous
 - 4. Magnonimus

Question ID : 9895805201

Chosen Option : 1

Q.1
6 From the given options, identify the segment in the sentence which contains the grammatical error.

The Builders' Associations want GST exemption for government projects which have already proposed.

- Ans
- 1. which have already proposed.
 - 2. want GST exemption

3. for government projects

4. The Builders' Associations

Question ID : 9895805180

Chosen Option : 1

Q.1
7 Select the most appropriate option to fill in the blank.

Is it true that the students from the Space Research Centre _____ this evening?

Ans 1. are arriving

2. is arriving

3. has arriving

4. have arriving

Question ID : 9895805184

Chosen Option : 1

Q.1
8 Select the most appropriate option to substitute the underlined segment in the given sentence. If there is no need to substitute it, select No Improvement.

These flowers smell sweetly and are sold at high prices in the market.

Ans 1. These flowers will smell sweetly

2. These flowers smelt sweetly

3. No improvement

4. These flowers smell sweet

Question ID : 9895805183

Chosen Option : 4

Q.1
9 Select the word which means the same as the group of words given.

One who studies antique things

Ans 1. Historian

2. Sociologist

3. Archaeologist

4. Antiquarian

Question ID : 9895805199

Chosen Option : 3

Q.2
0 Select the synonym of the given word.

INCORRIGIBLE

Ans 1. Reliable

2. Unwise

3. Intelligible

4. Unalterable

Question ID : 9895805193

Chosen Option : 4

Q.2 Select the most appropriate word to fill in the blank.

1

Although I was _____ of his new plans for growth of the company, I relied on him as he was very honest.

- Ans
- 1. persuaded
 - 2. committed
 - 3. convinced
 - 4. sceptical

Question ID : 9895805203
Chosen Option : 1

Q.2 Select the word which means the same as the group of words given.

2

One who offers one's services without anything in return

- Ans
- 1. Volunteer
 - 2. Entrepreneur
 - 3. Businessman
 - 4. Investor

Question ID : 9895805198
Chosen Option : 3

Q.2 Select the synonym of the given word.

3

DISHEVELLED

- Ans
- 1. Unsafe
 - 2. Unclean
 - 3. Uncertain
 - 4. Untidy

Question ID : 9895805192
Chosen Option : 3

Q.2 Choose the correct meaning of the following idiom.

4

To get away with

- Ans
- 1. To escape from something
 - 2. To go away from home
 - 3. To finish an assignment
 - 4. To go to an unknown place

Question ID : 9895805197
Chosen Option : 1

Q.2 Select the most appropriate option to fill in the blank.

5

_____ example helps understand a concept better.

- Ans
- 1. Few

Comprehension:

दिए गए अनुच्छेद में कुछ शब्द हटा दिए गए हैं। दिए गए विकल्पों की सहायता से रिक्त स्थान भरें। प्रत्येक संख्या के लिए उपयुक्त विकल्प का चयन करें।

सोने जैसी बहुमूल्य धातु को _____ (1) में पूरे संयम से तब तक तपाया जाता है जब तक उसकी खोट _____ (2) न हो जाए या वह जलकर भस्म न बन जाए। इसलिए हमें भी स्वर्ण की तरह _____ (3) होकर बाहर निकलने के लिए अपने _____ (4) में संयम की ज्वाला को हर समय प्रज्वलित रखनी चाहिए। जीवन की आकांक्षाओं के बहते हुए प्रवाह को रोक कर संयम का बाँध बना लेने पर जीवन _____ (5) कई गुना बढ़ जाती है।

SubQuestion No : 9

Q.9 गद्यांश में संकेतित रिक्त स्थान (1) के लिए उपयुक्त शब्द होगा -

- Ans
- 1. पृथ्वी
 - 2. पानी
 - 3. आग
 - 4. हवा

Question ID : 9895805495
Chosen Option : --

Comprehension:

दिए गए अनुच्छेद में कुछ शब्द हटा दिए गए हैं। दिए गए विकल्पों की सहायता से रिक्त स्थान भरें। प्रत्येक संख्या के लिए उपयुक्त विकल्प का चयन करें।

सोने जैसी बहुमूल्य धातु को _____ (1) में पूरे संयम से तब तक तपाया जाता है जब तक उसकी खोट _____ (2) न हो जाए या वह जलकर भस्म न बन जाए। इसलिए हमें भी स्वर्ण की तरह _____ (3) होकर बाहर निकलने के लिए अपने _____ (4) में संयम की ज्वाला को हर समय प्रज्वलित रखनी चाहिए। जीवन की आकांक्षाओं के बहते हुए प्रवाह को रोक कर संयम का बाँध बना लेने पर जीवन _____ (5) कई गुना बढ़ जाती है।

SubQuestion No : 10

Q.1
0

Q.2 रिक्त स्थान को भरने के लिए उपयुक्त शब्द का चयन करें।

मुझे समुद्र के _____ बैठना अच्छा लगता है।

- Ans
- 1. किनारे
 - 2. नीचे
 - 3. अंदर
 - 4. ऊपर

Question ID : 9895805490
Chosen Option : --

Q.2 दिये गये वाक्यांश के लिए एक शब्द चुनिए।

जहाँ जाया न जा सके

- Ans
- 1. सगम्य
 - 2. कुगम्य
 - 3. अगम्य
 - 4. सुगम्य

Question ID : 9895805506
Chosen Option : --

Q.2 दिए गए शब्द के पर्यायवाची शब्द का चयन करें।

अपमान

- Ans
- 1. तिरस्कार
 - 2. उपकार
 - 3. अदाकार
 - 4. कुम्भकार

Question ID : 9895805502
Chosen Option : --

Q.2 दिए गए वाक्य का वह भाग ज्ञात करें जिसमें कोई त्रुटि है।

फल और सब्जियाँ इतने महँगा हो गए कि भाव पूछने में डर लगता है।

- Ans
- 1. फल और सब्जियाँ
 - 2. हो गए कि
 - 3. इतने महँगा
 - 4. भाव पूछने में डर लगता है।

Question ID : 9895805484
Chosen Option : --

questionpaperdrive.in