

Constable (GD) in CAPFs, NIA, SSF and Rifleman (GD) in .8

Roll No
Regis
Name
Exam
Exam
Exam

Section : General Section

Q.1 The statements below are followed by two conclusions labeled I and II. Assuming that the information in the statements is true, even if it appears to be at variance with generally established facts, decide which conclusion(s) logically and definitely follow(s) from the information given in the statements.

Statements:

1. All pupils are crows.
2. All crows are cats.

Conclusion

- I. All cats are crows.
- II. Some crows are pupils.

- Ans**
- 1. Only conclusion I follows.
 - 2. Both conclusions follow.
 - 3. Either conclusion I or conclusion II follows.
 - 4. Only conclusion II follows.

Question ID : 9895802535
Chosen Option : 4

Q.2 Select the option that is related to the third term in the same way as the second term is related to the first term.

Lethargy : Alertness :: Peace : ?

- Ans**
- 1. Cheer
 - 2. Chaos
 - 3. Chat
 - 4. Choose

Question ID : 9895802528
Chosen Option : 1

Q.3 Select the option that is related to the third number in the same way as the second number is related to the first number.

22 : 441 :: 13 : ?

- Ans**
- 1. 221
 - 2. 144
 - 3. 275
 - 4. 169

Question ID : 9895802539
Chosen Option : 2

Q.4

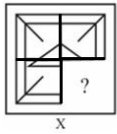
Question ID : 9895802531
Chosen Option : 3

Q.9 Four numbers have been given out of which three are alike in some manner, while one is different. Choose the odd one.

- Ans
- 1. 317
 - 2. 561
 - 3. 215
 - 4. 419

Question ID : 9895802540
Chosen Option : 3

Q.1 Select a figure from amongst the four alternatives, that when placed in the blank space (?) of figure X will complete the pattern. (Rotation is not allowed).



- Ans
- 1.
 - 2.
 - 3.
 - 4.

Question ID : 9895802544
Chosen Option : 3

Q.1 Choose the option that most closely resembles the mirror image of the given word if the mirror is placed at the right side.

PROWESS

- Ans
- 1.
 - 2.
 - 3.
 - 4.

Question ID : 9895802546
Chosen Option : 3

5 Choose the odd word out of the options.

- Ans 1. KENYA
 2. LONDON
 3. LISBON
 4. BANGKOK

Question ID : 9895802526
 Chosen Option : 4

Q.1 Seven friends O, P, Q, R, S, T and U are watching a cricket match sitting in a stadium. P is sitting at one extreme end. T is sitting between Q and U, and R is sitting to the immediate right of S and immediate left of Q. U is sitting second to the left of P. Who is sitting second to the left of T?

- Ans 1. P
 2. U
 3. R
 4. Q

Question ID : 9895802532
 Chosen Option : 2

Q.1 Find out the two signs to be interchanged to make the following equation correct.

$$25 + 26 \times 2 - 7 \div 3 = 17$$

- Ans 1. - and \times
 2. - and \div
 3. \times and \div
 4. + and -

Question ID : 9895802542
 Chosen Option : 1

Q.1 Which number will follow next in the given number series?

2, 37, 82, 137, ?

- Ans 1. 202
 2. 247
 3. 147
 4. 182

Question ID : 9895802537
 Chosen Option : 4

Q.1 The statements below are followed by two conclusions labeled I and II. Assuming that the information in the statements is true, even if it appears to be at variance with generally established facts, decide which conclusion(s) logically and definitely follow(s) from the information given in the statements.

Statements:

1. Some joules are energies.
2. Some energies are radiuses.

Conclusion:

- I. Some radiuses are energies.
- II. Some energies are joules.

- Ans 1. Neither conclusion I nor conclusion II follows.


✗ 2.



✓ 3.



✗ 4.



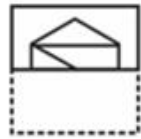
Question ID : 9895802543
Chosen Option : 3

Q.2 A square transparent sheet with a pattern is given. How will the pattern appear when the transparent sheet is folded along the dotted line?

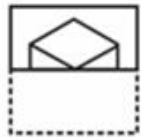


Ans

✗ 1.



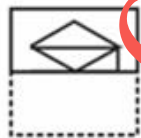
✓ 2.



✗ 3.



✗ 4.



Question ID : 9895802547
Chosen Option : 2

Q.2 Select the Venn diagram that best represents the given set of classes.

Squirrels, Parrots, Mammals

Ans

Question ID : 9895803102
Chosen Option : 2

Q.3
8 Jammu and Kashmir has been given special status under Article _____.

- Ans
- 1. 370
 - 2. 100
 - 3. 111
 - 4. 12

Question ID : 9895803091
Chosen Option : 1

Q.3
9 The small pores on the lower surface of the leaf are called _____.

- Ans
- 1. pore
 - 2. opening
 - 3. cilia
 - 4. stomata

Question ID : 9895803101
Chosen Option : 1

Q.4
0 The economist _____ received the Noble prize in 1998.

- Ans
- 1. Dr. Manmohan Singh
 - 2. Raghuram Rajan
 - 3. Amartya Sen
 - 4. Abhijit Vinayak Banerjee

Question ID : 9895803089
Chosen Option : 3

Q.4
1 _____ are the nomads of the Jammu and Kashmir.

- Ans
- 1. Bhotiyas
 - 2. Gaddi Shepherds
 - 3. Sherpas
 - 4. Gujjar Bakarwals

Question ID : 9895803080
Chosen Option : 2

Q.4
2 _____ is the most ductile metal from the following.

- Ans
- 1. Iron
 - 2. Aluminium
 - 3. Copper
 - 4. Gold

Question ID : 9895803100
Chosen Option : 2

Q.4
3 The Hawa Mahal is located in which city _____.

- Ans
- 1. Delhi
 - 2. Jaipur
 - 3. Gujarat
 - 4. Agra

Question ID : 9895803094
Chosen Option : 2

Q.4
4 The Judicial system in India contains a hierarchy of courts where _____ is the Highest.

- Ans
- 1. Supreme court
 - 2. Village Panchayat
 - 3. High Court
 - 4. District Court

Question ID : 9895803092
Chosen Option : 1

Q.4
5 Who among the following was inspired by the ideals of the French Revolution?

- Ans
- 1. Tipu Sultan
 - 2. Aurobindo Gosh
 - 3. Annie Besant
 - 4. Badruddin Tyabji

Question ID : 9895803081
Chosen Option : 1

Q.4
6 Which of the following is NOT tributary of the river Indus?

- Ans
- 1. Ravi
 - 2. Jhelum
 - 3. Chenab
 - 4. Ganges

Question ID : 9895803085
Chosen Option : 3

Q.4
7 _____ is the youngest recipient of the Rajiv Gandhi Khel Ratan Award.

- Ans
- 1. Geet Sethi
 - 2. Virat Kohli
 - 3. Vishwanathan Anand
 - 4. Abhinav Bindra

Question ID : 9895803083
Chosen Option : 3

Q.4
8 Which of the following reacts with water?

- Ans
- 1. Silver
 - 2. Copper
 - 3. Lead
 - 4. Calcium

Question ID : 9895803103
Chosen Option : 3

Q.4
9 Lathmaar Holi is celebrated in _____.

- Ans
- 1. Varanasi
 - 2. Ayodhaya
 - 3. Dwarka
 - 4. Barsana and Nandgaon

Question ID : 9895803095
Chosen Option : 4

Q.5
0 _____ is India's first wicket keeper to have taken 300 catches.

- Ans
- 1. MS Dhoni
 - 2. Virender Sehwag
 - 3. Suresh Raina
 - 4. Sourav Ganguly

Question ID : 9895803096
Chosen Option : 1

Q.5
1 What is the value of $\left[6\frac{1}{5} \times \frac{5}{6} \text{ of } \left(\frac{2}{3} - \frac{6}{62} + \frac{1}{62}\right)\right]$?

- Ans
- 1. $\frac{47}{108}$
 - 2. $\frac{33}{20}$
 - 3. $\frac{47}{62}$
 - 4. $\frac{43}{108}$

Question ID : 9895804260
Chosen Option : 1

Q.5
2

The data given below shows the number of people who have saved a certain amount of money.

Savings (in ₹)	Number of people
5	1
15	3
20	4
25	2
30	1
35	1
40	2

What is the mode of the given data?

- Ans 1. ₹ 20
 2. ₹ 30
 3. ₹ 25
 4. ₹ 15

Question ID : 9895804265
Chosen Option : 2

Q.5 What will be the average of first four positive multiples of 8?

- Ans 1. 16
 2. 20
 3. 32
 4. 24

Question ID : 9895804263
Chosen Option : 2

Q.5 The average age of 50 teachers of a school is 66 years and the average age of 60 teachers of another school is 55 years.
4 What will be average age of teachers of both the schools together?

- Ans 1. 60 years
 2. 57.5 years
 3. 65 years
 4. 62.5 years

Question ID : 9895804262
Chosen Option : 4

Q.5 The height of a cone is 24 cm and radius of its base 10 cm. If the rate of painting it is ₹ 28/cm², then what will be the total cost in painting the cone from outside?

- Ans 1. ₹ 18880
 2. ₹ 20820

3. ₹ 17660

4. ₹ 22880

Question ID : 9895804279
Chosen Option : 3

Q.5 Anil goes to his office at the speed of 35 km/hr and returns to his home at the speed of 30 km/hr. If he takes total 39 hours, then what is the distance between his office and home?

Ans 1. 420 km

2. 525 km

3. 630 km

4. 210 km

Question ID : 9895804277
Chosen Option : 2

Q.5 The price of two articles are in the ratio of 4 : 3 respectively. The price of first article is increased by 50% and the price of second article is decreased by 10%. If the new price of second article is ₹ 54, then what was the original price of first article?

Ans 1. ₹ 120

2. ₹ 80

3. ₹ 100

4. ₹ 90

Question ID : 9895804271
Chosen Option : 4

Q.5 Selling price and cost price of a book are in the ratio of 3 : 4. What will be the profit/loss percentage?

Ans 1. 25% loss

2. 33.33% profit

3. 66.66% loss

4. 20% profit

Question ID : 9895804268
Chosen Option : 2

Q.5 C alone can complete a work in 20 days and D alone can complete the same work in 30 days. In how many days C and D together can complete the same work?

Ans 1. 6 days

2. 12 days

3. 15 days

4. 8 days

Question ID : 9895804274
Chosen Option : 2

Q.6 What will be the difference between the compound interest (interest is compounded annually) and simple interest on a sum of ₹ 3200 at the rate of 20% per annum for 2 years?

Ans 1. ₹ 128

2. ₹ 148

3. ₹ 132

✗ 4. ₹ 96

Question ID : 9895804273
Chosen Option : 3

Q.6
1 What will be the Highest Common Factor of

$$2^3 \times 3^5 \times 5^5 \text{ and } 3^1 \times 5^2 \times 7^1?$$

- Ans
- ✗ 1. $2^1 \times 3^1 \times 5^2$
 - ✗ 2. $2^1 \times 3^1 \times 5^2 \times 7^1$
 - ✗ 3. $2^3 \times 3^5 \times 5^7 \times 7^1$
 - ✓ 4. $3^1 \times 5^2$

Question ID : 9895804259
Chosen Option : 3

Q.6
2 What is the value of $\left[4 + 200 \div 50 + \frac{3}{2} \text{ of } \left(\frac{1}{5} - \frac{1}{4}\right)\right]?$

- Ans
- ✓ 1. $\frac{317}{40}$
 - ✗ 2. $\frac{323}{40}$
 - ✗ 3. $\frac{337}{40}$
 - ✗ 4. $\frac{329}{40}$

Question ID : 9895804261
Chosen Option : 4

Q.6
3 A sum becomes 14 times of itself in 15 years at the rate of simple interest per annum. In how many years will the sum become 92 times of itself?

- Ans
- ✗ 1. 91 years
 - ✗ 2. 195 years
 - ✓ 3. 105 years
 - ✗ 4. 210 years

Question ID : 9895804272
Chosen Option : 3

Q.6
4 B is 20% more than A and C is 25% more than B. If C = 330, then what will be the value of A?

- Ans
- ✗ 1. 198
 - ✗ 2. 214
 - ✗ 3. 250
 - ✓ 4. 220

Question ID : 9895804266
Chosen Option : 2

Q.6
5

The table given below shows the runs scored by 4 different batsmen B1, B2, B3 and B4 in 5 different matches of a series.

	Matches				
	M1	M2	M3	M4	M5
B1	120	95	83	86	20
B2	12	8	0	196	52
B3	23	36	45	19	27
B4	56	65	85	45	42

What is the per match average number of run scored by batsman B3?

- Ans
- 1. 36
 - 2. 35
 - 3. 28
 - 4. 30

Question ID : 9895804281
Chosen Option : 4

Q.6 The table given below shows the runs scored by 4 different batsmen B1, B2, B3 and B4 in 5 different matches of a series.

	Matches				
	M1	M2	M3	M4	M5
B1	120	95	83	86	20
B2	12	8	0	196	52
B3	23	36	45	19	27
B4	56	65	85	45	42

What is the difference in the total number of runs scored by B1 and B4 in these 5 matches?

- Ans
- 1. 98
 - 2. 111
 - 3. 87
 - 4. 124

Question ID : 9895804283
Chosen Option : 4

Q.6 The length and breadth of a rectangular garden is 12 cm and 9 cm. What will be the area of the rectangular garden?

- Ans
- 1. 96 cm²
 - 2. 112 cm²
 - 3. 84 cm²
 - 4. 108 cm²

Question ID : 9895804278
Chosen Option : 2

Q.6 If $A : B : C = 4 : 5 : 6$, then what is the ratio of $(1/A) : (1/B) : (1/C)$?

- Ans
- 1. 15 : 10 : 12
 - 2. 10 : 12 : 15
 - 3. 15 : 12 : 10
 - 4. 12 : 10 : 15

Question ID : 9895804269
Chosen Option : 2

Q.6 The perimeter of a rectangular table is 48 cm. If the area of the rectangular table is 128 cm², then what will be the length of the table?

4. Ecologist

Question ID : 9895804127
Chosen Option : 1

Q.4 Select the word which means the same as the group of words given.

Handwriting that cannot be read

- Ans
- 1. Legible
 - 2. Corrigible
 - 3. Negligible
 - 4. Illegible

Question ID : 9895804128
Chosen Option : 4

Q.5 Identify the segment in the sentence which contains the grammatical error from the given options.

Buses run from this bus stand every few minutes because you shall not have to wait.

- Ans
- 1. Buses run from
 - 2. every few minutes
 - 3. have to wait
 - 4. because you shall

Question ID : 9895804106
Chosen Option : 3

Q.6 Identify the segment in the sentence which contains the grammatical error from the given options.

She gave a loud shout, which heard across the village.

- Ans
- 1. She gave
 - 2. loud shout
 - 3. which heard
 - 4. across the village

Question ID : 9895804105
Chosen Option : 2

Q.7 Select the most appropriate word to fill in the blank.

The forest officers _____ a leopard cub trapped in a pit.

- Ans
- 1. discovered
 - 2. founded
 - 3. invented
 - 4. searched

Question ID : 9895804111
Chosen Option : 1

Q.8

Select the most appropriate meaning of the given idiom.

Get out of hand

- Ans 1. Appreciable
 2. Uncontrollable
 3. Manageable
 4. Controllable

Question ID : 9895804125
 Chosen Option : 1

Q.9 Select the most appropriate synonym of the given word.

DUBIOUS

- Ans 1. Delicate
 2. Dutiful
 3. Duplicate
 4. Doubtful

Question ID : 9895804123
 Chosen Option : 4

Q.1 Select the most appropriate option to substitute the underlined segment in the given sentence. If there is no need to substitute it, select No improvement.

Rishi cleared the IIT entrance examination but do not pursue engineering due to personal reasons.

- Ans 1. did not pursue
 2. was not pursuing
 3. No improvement
 4. has not pursue

Question ID : 9895804109
 Chosen Option : 1

Q.1 Select the most appropriate antonym of the given word.

ORDINARY

- Ans 1. Unique
 2. Common
 3. Normal
 4. Regular

Question ID : 9895804121
 Chosen Option : 2

Q.1 Fill in the blanks with the most appropriate words.

They did it as you _____ them to.

- Ans 1. are telling
 2. had told

- 3. tell
- 4. will tell

Question ID : 9895804113
Chosen Option : 4

Q.1
3 Select the correctly spelt word.

- Ans
- 1. Playwright
 - 2. Playwrite
 - 3. Playwriter
 - 4. Playright

Question ID : 9895804130
Chosen Option : 4

Q.1
4 Select the most appropriate meaning of the given idiom.

To hold your horses

- Ans
- 1. To control horses
 - 2. To have patience
 - 3. To be too quick
 - 4. To be excited

Question ID : 9895804126
Chosen Option : 1

Comprehension:

In the following passage some words have been deleted. Fill in the blanks with the help of the alternatives given.

Suppose you have to make a payment of Rs. 100, you can do so in coins; but it would be _____ (1) to pay in nickel or copper coins, because it takes much time to _____ (2) them. The government _____ (3) permits you to make the payment in _____ (4) What are these notes really? They are a kind of money although they are made of _____ (5) instead of metal.

SubQuestion No : 15

Q.1
5 Fill in blank (1) with the most appropriate option.

- Ans
- 1. cumbersome
 - 2. feasible
 - 3. practical
 - 4. easy

Question ID : 9895804116
Chosen Option : 4

Comprehension:

8 Fill in blank (4) with the most appropriate option.

- Ans 1. notes
 2. coins
 3. card
 4. currency

Question ID : 9895804119
 Chosen Option : 1

Comprehension:

In the following passage some words have been deleted. Fill in the blanks with the help of the alternatives given.

Suppose you have to make a payment of Rs. 100, you can do so in coins; but it would be _____ (1) to pay in nickel or copper coins, because it takes much time to _____ (2) them. The government _____ (3) permits you to make the payment in _____ (4) What are these notes really? They are a kind of money although they are made of _____ (5) instead of metal.

SubQuestion No : 19

Q.1 Fill in blank (5) with the most appropriate option.

- Ans 1. paper
 2. plastic
 3. wood
 4. cloth

Question ID : 9895804120
 Chosen Option : 1

Q.2 Select the most appropriate option to substitute the underlined segment in the given sentence. If there is no need to substitute it, select No improvement.

Don't talk as soon as she is dancing.

- Ans 1. how
 2. as long as
 3. but
 4. No improvement

Question ID : 9895804108
 Chosen Option : 3

Q.2 Select the most appropriate option to substitute the underlined segment in the given sentence. If there is no need to substitute it, select No improvement.

India expressed concern at the arrest of 130 Indian students enrolling at a fake university in Detroit.

- Ans 1. enrolling in a fake university
 2. No improvement
 3. enrolled at a fake university
 4. enroll by a fake university

Question ID : 9895804110
 Chosen Option : 3

Q.2
2 Select the correctly spelt word.

- Ans
- 1. Succesfully
 - 2. Successfuly
 - 3. Sucessfully
 - 4. Successfully

Question ID : 9895804129
Chosen Option : 3

Q.2
3 Identify the segment in the sentence which contains the grammatical error from the given options.

The work is too much for any man to do single-hand.

- Ans
- 1. too much
 - 2. The work is
 - 3. any man to
 - 4. single-hand

Question ID : 9895804107
Chosen Option : 1

Q.2
4 Select the most appropriate antonym of the given word.

VIGOROUS

- Ans
- 1. Feeble
 - 2. Curious
 - 3. Trivial
 - 4. Strong

Question ID : 9895804122
Chosen Option : 2

Q.2
5 Select the most appropriate word to fill in the blank.

I shall be glad if you _____ my proposal.

- Ans
- 1. except
 - 2. expect
 - 3. intercept
 - 4. accept

Question ID : 9895804112
Chosen Option : 4

Section : Hindi Language

Q.1 निम्नलिखित में से उस विकल्प का चयन करें जो ' कोल्हू का बैल होना ' मुहावरे का अर्थ व्यक्त करता है।

- Ans
- 1. बैल के समान बुद्धि होना
 - 2. बैल से कोल्हू चलवाना

✓ 3. रात-दिन काम में लगे रहना

✗ 4. कोल्हू में बैल जोतना

Question ID : 9895803513
Chosen Option : --

Q.2 रिक्त स्थान को भरने के लिए सबसे उपयुक्त शब्द का चयन करें।

कालिदास बहुत _____ कवि थे।

Ans ✗ 1. रोगी

✗ 2. बड़े

✓ 3. छोटे

✗ 4. मूर्ख

Question ID : 9895803501
Chosen Option : --

Q.3 सही वर्तनी वाले शब्द का चयन करें।

Ans ✗ 1. ट्यावस्था

✗ 2. वयवस्था

✓ 3. ट्यवस्था

✗ 4. ट्यवसथा

Question ID : 9895803517
Chosen Option : --

Q.4 रिक्त स्थान को भरने के लिए सबसे उपयुक्त शब्द का चयन करें।

मछली _____ में तैरती है।

Ans ✓ 1. तेल

✗ 2. पानी

✗ 3. बादल

✗ 4. आकाश

Question ID : 9895803498
Chosen Option : --

Q.5 रिक्त स्थान को भरने के लिए सबसे उपयुक्त शब्द का चयन करें।

मेरे प्रश्न का _____ कौन देगा ?

Ans ✓ 1. उत्तर

✗ 2. पुरस्कार

✗ 3. शब्द

✗ 4. फल

Question ID : 9895803499

दिए गए अनुच्छेद में कुछ शब्द हटा दिए गए हैं। दिए गए विकल्पों की सहायता से रिक्त स्थान भरें। प्रत्येक संख्या के लिए सबसे उपयुक्त विकल्प का चयन करें।

संसार में बहुत सी वस्तुएँ बार-बार मिल सकती हैं। किंतु चार वस्तुएँ कभी _____ (1) नहीं आतीं: मुँह से निकला _____ (2), कमान से निकला तीर, खोया अवसर और बीता समय। सफलता का पहला मंत्र है - समय प्रबंधन। 'कल नहीं आज' यह _____ (3) का परम मंत्र है। हमें जीवन के हर क्षेत्र में इसका _____ (4) करना चाहिए। जो आज को सार्थक बनाता है, उसके भूत और भविष्य _____ (5) हो जाते हैं।

SubQuestion No : 10

Q.1 गद्यांश में संकेतित रिक्त स्थान (1) के लिए उपयुक्त शब्द होगा -

- Ans
- 1. उठकर
 - 2. लौटकर
 - 3. बनकर
 - 4. मिलकर

Question ID : 9895803503

Chosen Option : --

Comprehension:

दिए गए अनुच्छेद में कुछ शब्द हटा दिए गए हैं। दिए गए विकल्पों की सहायता से रिक्त स्थान भरें। प्रत्येक संख्या के लिए सबसे उपयुक्त विकल्प का चयन करें।

संसार में बहुत सी वस्तुएँ बार-बार मिल सकती हैं। किंतु चार वस्तुएँ कभी _____ (1) नहीं आतीं: मुँह से निकला _____ (2), कमान से निकला तीर, खोया अवसर और बीता समय। सफलता का पहला मंत्र है - समय प्रबंधन। 'कल नहीं आज' यह _____ (3) का परम मंत्र है। हमें जीवन के हर क्षेत्र में इसका _____ (4) करना चाहिए। जो आज को सार्थक बनाता है, उसके भूत और भविष्य _____ (5) हो जाते हैं।

SubQuestion No : 11

Q.1 गद्यांश में संकेतित रिक्त स्थान (2) के लिए उपयुक्त शब्द होगा -

- Ans
- 1. शब्द
 - 2. कंठ
 - 3. पानी
 - 4. खाना

Question ID : 9895803504

Chosen Option : --

Comprehension:

दिए गए अनुच्छेद में कुछ शब्द हटा दिए गए हैं। दिए गए विकल्पों की सहायता से रिक्त स्थान भरें। प्रत्येक संख्या के लिए सबसे उपयुक्त विकल्प का चयन करें।

संसार में बहुत सी वस्तुएँ बार-बार मिल सकती हैं। किंतु चार वस्तुएँ कभी _____(1) नहीं आतीं: मुँह से निकला _____(2), कमान से निकला तीर, खोया अवसर और बीता समय। सफलता का पहला मंत्र है - समय प्रबंधन। 'कल नहीं आज' यह _____(3) का परम मंत्र है। हमें जीवन के हर क्षेत्र में इसका _____(4) करना चाहिए। जो आज को सार्थक बनाता है, उसके भूत और भविष्य _____(5) हो जाते हैं।

SubQuestion No : 12

Q.1
2 गद्यांश में संकेतित रिक्त स्थान (3) के लिए उपयुक्त

शब्द होगा -

- Ans
- 1. असफलता
 - 2. निराशा
 - 3. हार
 - 4. सफलता

Question ID : 9895803505

Chosen Option : --

Comprehension:

दिए गए अनुच्छेद में कुछ शब्द हटा दिए गए हैं। दिए गए विकल्पों की सहायता से रिक्त स्थान भरें। प्रत्येक संख्या के लिए सबसे उपयुक्त विकल्प का चयन करें।

संसार में बहुत सी वस्तुएँ बार-बार मिल सकती हैं। किंतु चार वस्तुएँ कभी _____(1) नहीं आतीं: मुँह से निकला _____(2), कमान से निकला तीर, खोया अवसर और बीता समय। सफलता का पहला मंत्र है - समय प्रबंधन। 'कल नहीं आज' यह _____(3) का परम मंत्र है। हमें जीवन के हर क्षेत्र में इसका _____(4) करना चाहिए। जो आज को सार्थक बनाता है, उसके भूत और भविष्य _____(5) हो जाते हैं।

SubQuestion No : 13

Q.1
3 गद्यांश में संकेतित रिक्त स्थान (4) के लिए उपयुक्त

शब्द होगा -

- Ans
- 1. उपहास
 - 2. परिष्कार
 - 3. अनुसरण
 - 4. तिरस्कार

Question ID : 9895803506

Chosen Option : --

Comprehension:

- 1. ईर्ष्या
- 2. प्रेम
- 3. द्वेष
- 4. निंदा

Question ID : 9895803509
Chosen Option : --

Q.1 निम्नलिखित में से उस विकल्प का चयन करें जो ' आँख खुलना ' मुहावरे का अर्थ व्यक्त करता है।

- Ans
- 1. वास्तविकता का बोध होना
 - 2. भ्रमित होना
 - 3. गलत काम करना
 - 4. अपनी आँखें खोलना

Question ID : 9895803512
Chosen Option : --

Q.1 9 दिये गये वाक्यांश के लिए एक शब्द दीजिये।

जो कभी बूढ़ा न हो

- Ans
- 1. यौवन
 - 2. अमर
 - 3. अजर
 - 4. अमृत

Question ID : 9895803515
Chosen Option : --

Q.2 0 दिए गए शब्द के पर्यायवाची शब्द का चयन करें।

किसलय

- Ans
- 1. पुस्तकालय
 - 2. भोजनालय
 - 3. विद्यालय
 - 4. नवपल्लव

Question ID : 9895803511
Chosen Option : --

Q.2 1 दिए गए वाक्य का वह भाग ज्ञात करें जिसमें कोई त्रुटि है।

भाषण एक सामाजिक कला है जिसकी संबंध विभिन्न समस्याओं से होता है।

- Ans
- 1. भाषण एक सामाजिक कला है
 - 2. जिसकी संबंध
 - 3. विभिन्न समस्याओं से

questionpaperdrive.in